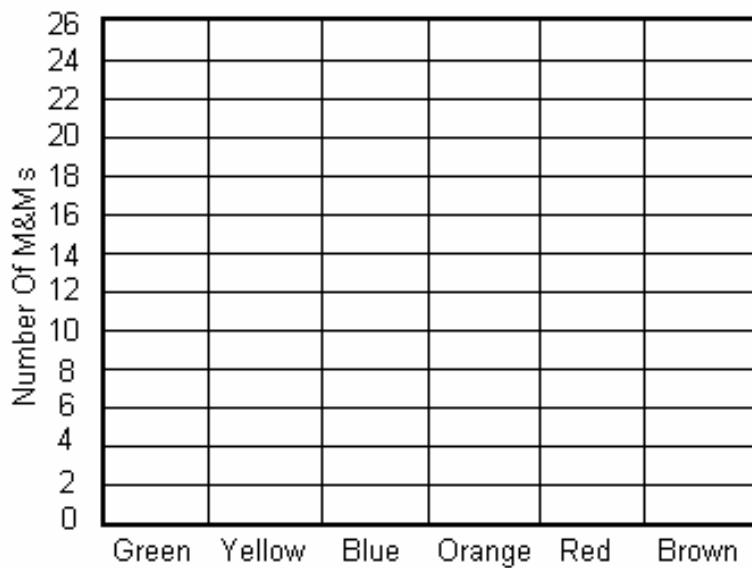


M&M Lab

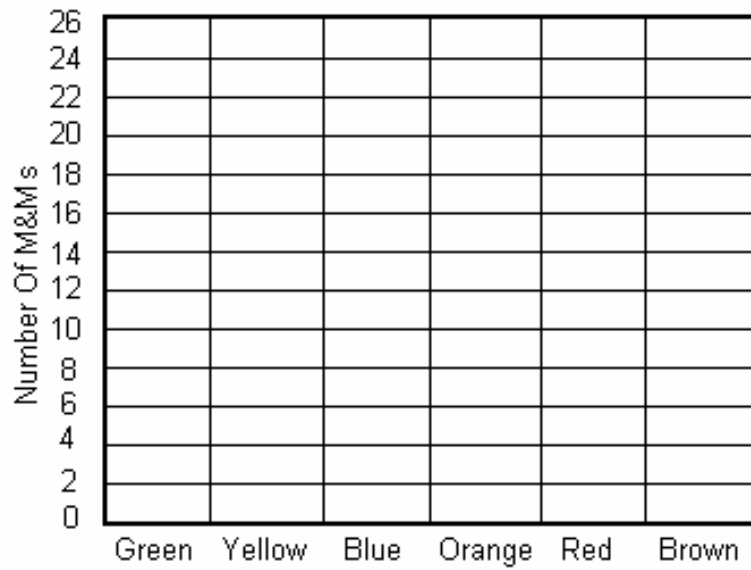
1. Tally and find the frequency of each color.

Color	Tally	Frequency
Green		
Yellow		
Blue		
Orange		
Red		
Brown		

2. Use the data you collected from the tally above and make a bar graph.





3. Make a line graph.



4. Make a pictograph. (Hint: Remember to follow the key below.)

Colors	Amount of M&M s
Green	
Yellow	
Blue	
Orange	
Red	
Brown	

 = 2 M&Ms
 = 1 M&M

**ASSESSMENT RUBRIC FOR
M&M LAB**

SCORING	3 POINTS	2 POINTS	1 POINT
----------------	-----------------	-----------------	----------------

TALLY CHART	Filled out correctly	Filled out, but not exact	Some information has been omitted
BAR GRAPH	Filled out correctly	Filled out, but not exact	Some information has been omitted
LINE GRAPH	Filled out correctly	Filled out, but not exact	Some information has been omitted
PICTOGRAPH	Filled out correctly	Filled out, but not exact	Some information has been omitted