







Practicing The Bear Facts

Name: _____



Directions: Listen for key words as your teacher reads each problem. Decide if it is an addition or subtraction problem and place the correct symbol in the circle. Write the correct numbers in blanks and solve.

1.  bears standing.
 bears sitting.
How many bears are there altogether?
_____ ○ _____

2.  bears are eating.
 bears join them.
How many bears are there in all?
_____ ○ _____

3.  bears are in the lake.
 bears come along.
How many bears are there altogether?
_____ ○ _____

4.  bears are hunting.
 bears leave.
How many bears are still there?
_____ ○ _____

5.  bears are hunting.
 bears get lost.
How many bears are not lost?
_____ ○ _____